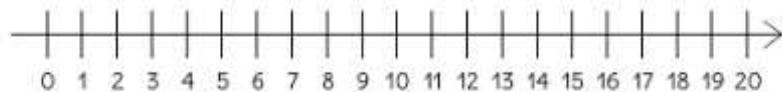
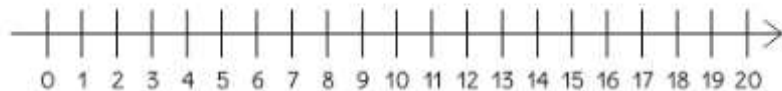


$$18 - 4 = \underline{\quad}$$



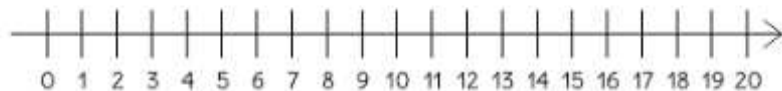
$$12 - 3 = \underline{\quad}$$



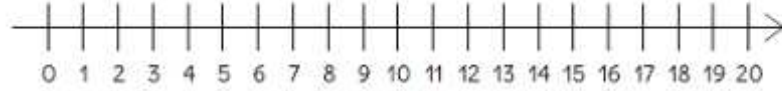
$$16 - 7 = \underline{\quad}$$



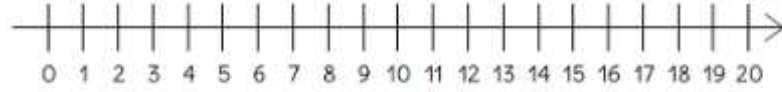
$$11 - 6 = \underline{\quad}$$



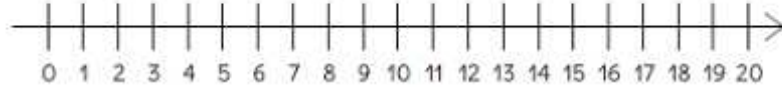
$$9 - 6 = \underline{\quad}$$



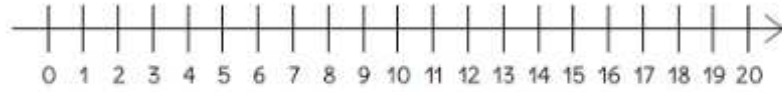
$$8 - 3 = \underline{\quad}$$



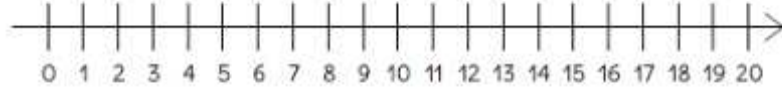
$$13 - 7 = \underline{\quad}$$



$$18 - 6 = \underline{\quad}$$



$$15 - 4 = \underline{\quad}$$



$$11 - 6 = \underline{\quad}$$