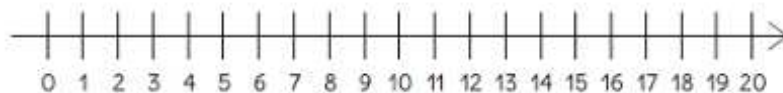
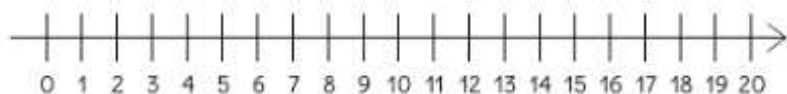


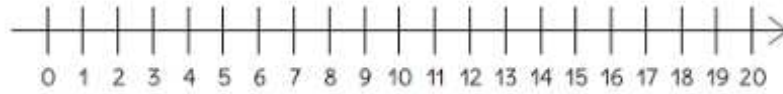
$$13 - 5 = \underline{\quad}$$



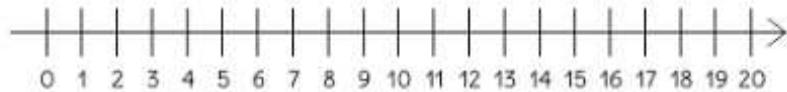
$$16 - 7 = \underline{\quad}$$



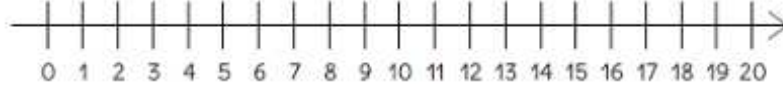
$$14 - 7 = \underline{\quad}$$



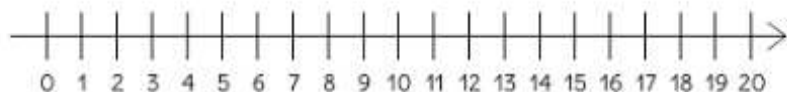
$$7 - 4 = \underline{\quad}$$



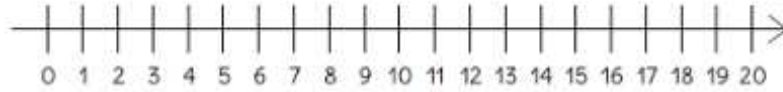
$$19 - 3 = \underline{\quad}$$



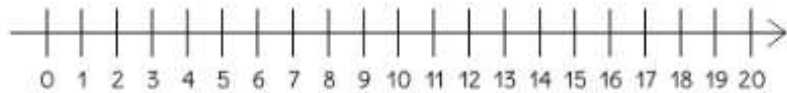
$$8 - 6 = \underline{\quad}$$



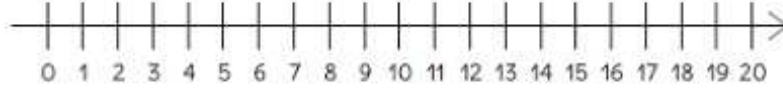
$$12 - 7 = \underline{\quad}$$



$$13 - 4 = \underline{\quad}$$



$$15 - 9 = \underline{\quad}$$



$$11 - 8 = \underline{\quad}$$

