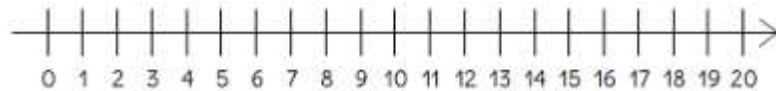



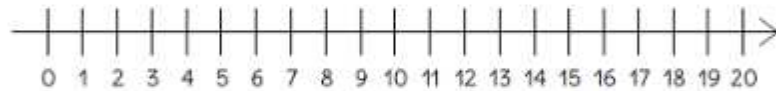
$$6 - 5 = \underline{\quad}$$



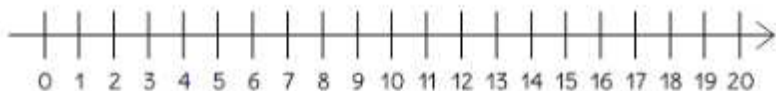
$$15 - 4 = \underline{\quad}$$



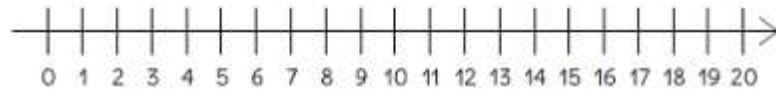
$$9 - 3 = \underline{\quad}$$




$$18 - 6 = \underline{\quad}$$



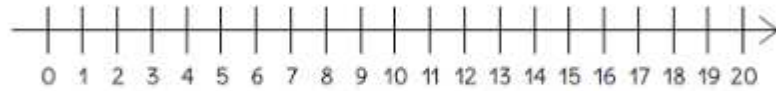
$$8 - 4 = \underline{\quad}$$



$$13 - 4 = \underline{\quad}$$



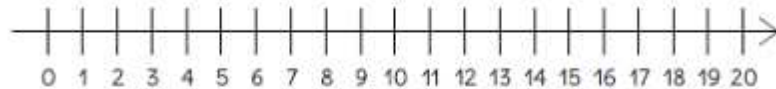
$$12 - 5 = \underline{\quad}$$



$$17 - 8 = \underline{\quad}$$



$$13 - 6 = \underline{\quad}$$



$$12 - 3 = \underline{\quad}$$

